

Candidate B evidence

SECTION 1 — 25 marks

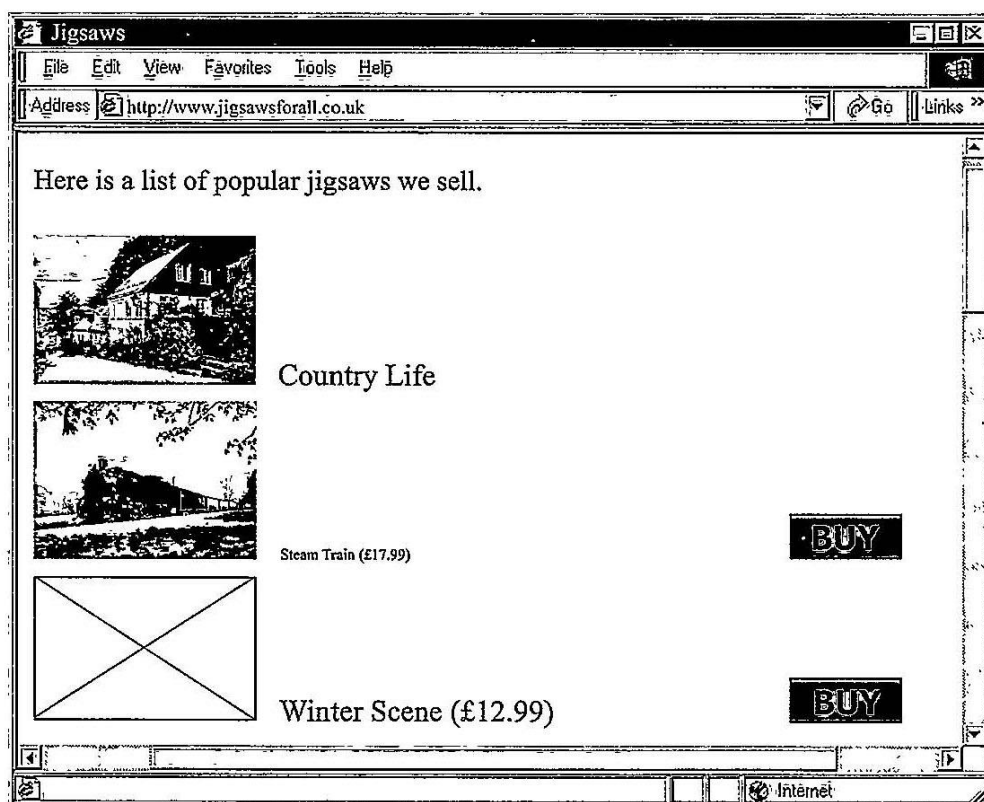
Attempt ALL questions

1. State a graphic file type suitable for storing an animated logo.

1

GIF

2. The web page below was created to sell jigsaws online.



State two reasons why the above web page is not fit for purpose.

2

Reason 1 The font is inconsistently sized

Reason 2 Not all the graphics load

3. Describe one method used to reduce the file size of a sound file without altering its running time. 1

Use lossless compression

4. The program below is used to switch a security light on or off depending on a reading taken from a light sensor.

Line 1 DECLARE storedLight INITIALLY 765.2

Line 2 RECEIVE reading FROM <light sensor>

Line 3 IF reading < storedLight THEN

Line 4 <switch on light>

Line 5 ELSE

Line 6 <switch off light>

Line 7 END IF

- (a) State the smallest light sensor value that would result in the security light being off. 1

765.2

- (b) The value 765.2 would be stored in a computer system using 'floating-point representation' as shown below.

$$0.7652 \times 10^3$$

Identify the mantissa and exponent in the above floating-point representation. 2

Mantissa 0.7652

Exponent 3

5. State why a database table should be designed to include a primary key field. 1

So that each record has a unique identifier

6. State a precaution used to secure data in electronic communications. 1

Encryption

7. The code for part of a program is shown below.

...

Line 41 SET runnerTime TO firstRaceTime +
secondRaceTime + thirdRaceTime +
fourthRaceTime + fifthRaceTime

Line 42 SET runnerAverage TO runnerTime / 5

Line 43 <display average to 2 decimal places>

...

- State the pre-defined function and a parameter that could be used in Line 43. 2

Pre-defined function Round

Parameter 2 decimal places

8. Describe one aspect of consistency that should be considered when testing a website. 1

Colour layout should be similar

9. When a mouse pointer hovers over an image on a web page the image changes to a different picture.

State the type of coding and the event used to implement this. 2

Type of coding JavaScript

Event On Mouse Over

10. A shop stores stock information in a database. Part of the database table is shown below.

Stock				
stockCode	type	description	price	quantity
2374	Vase	Blue with floral pattern	12.40	1
3467	Book	Satellite Games	0.45	2
4576	Book	Organic Farming	0.45	1
186	Garden	Hand fork	0.90	1
8964	Jigsaw	Picture of Culzean Castle	1.00	1
3647	DVD	The 49 Steps	0.45	1
762	Book	Baking Pies	0.45	1

The manager writes the following SQL statement to change the price of all books to 50p.

```
UPDATE Stock
SET price = 0.50
WHERE price = 0.45;
```

- (a) Explain why the SQL statement above would give an unexpected result. 1

The price of all things valued at 0.45 would change, not just the books.

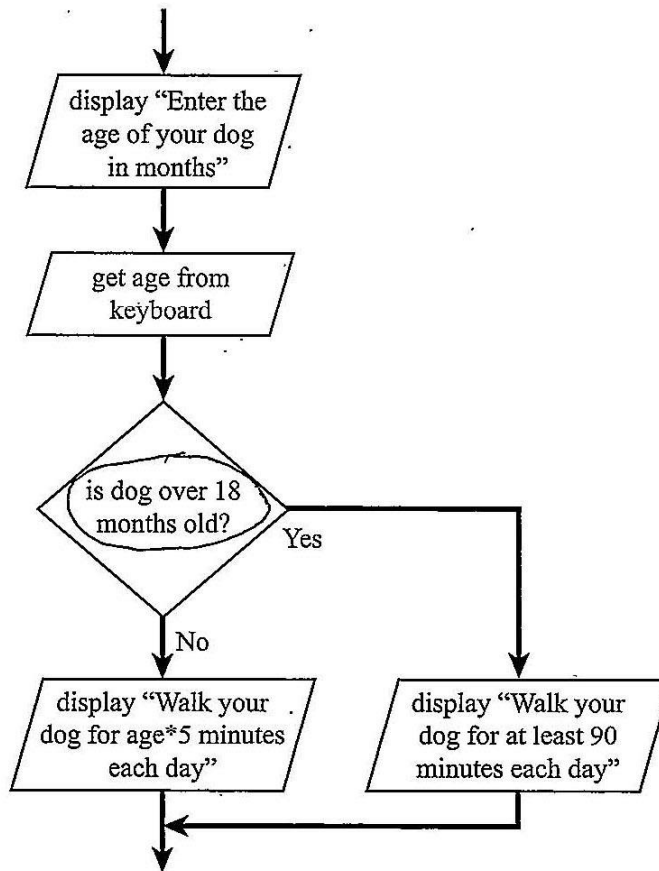
- (b) Rewrite the SQL statement to give the expected output. 2

```
UPDATE Stock
SET Price = 0.50
WHERE type = Book
```

11. The design shown below asks a user to enter the age of their dog. It then displays advice on how many minutes the dog should be walked each day.

Circle the condition in the design below.

1



12. Explain why low-fidelity prototypes are used when designing a website.

1

So that the client has an 'idea of what the site will look like.

13. Eduardo has created a website to display photos that he has taken.

Explain why Eduardo did not have to consider the Copyright Designs and Patents Act when creating his website.

1

Because he owns the photos, so doesn't need to ask permission from anyone else.

14. The program code below calculates the delivery cost of orders.

...

Line 13 IF orderTotal < 50.00 AND NOT(cardType = "Platinum") THEN

Line 14 SET deliveryCost TO 5.00

Line 15 ELSE

Line 16 SET delivery TO 1.50

Line 17 END IF

Line 18 SEND deliveryCost TO DISPLAY

...

(a) Explain why the program may not display the expected output at line 18. 1

If the criteria isn't met, then no value
is given for delivery cost as the variable
name is incorrect on line 16.

(b) Identify one logical operator in the above code. 1

~~AND~~ <

(c) State the delivery cost for the following order. 1

Card Type: Gold
Order Total: 43.00

£5

15. Explain why a conditional loop would be used when writing code. 1

So that you can't continue the programme
without meeting the loop criteria.

16. A database table 'TeamScore' stores information about a team's top scorers. The table is shown below.

TeamScore		
competitor	club	averageScore
R. Oliver	Fairmilehead	92.0
G. Byer	Currie	92.5
K. Willis	Peterborough	91.4
B. McRae	Dunfermline	97.0

Describe what would happen to the table when the SQL statement below is run.

```
DELETE FROM TeamScore  
WHERE averageScore < 92.0;
```

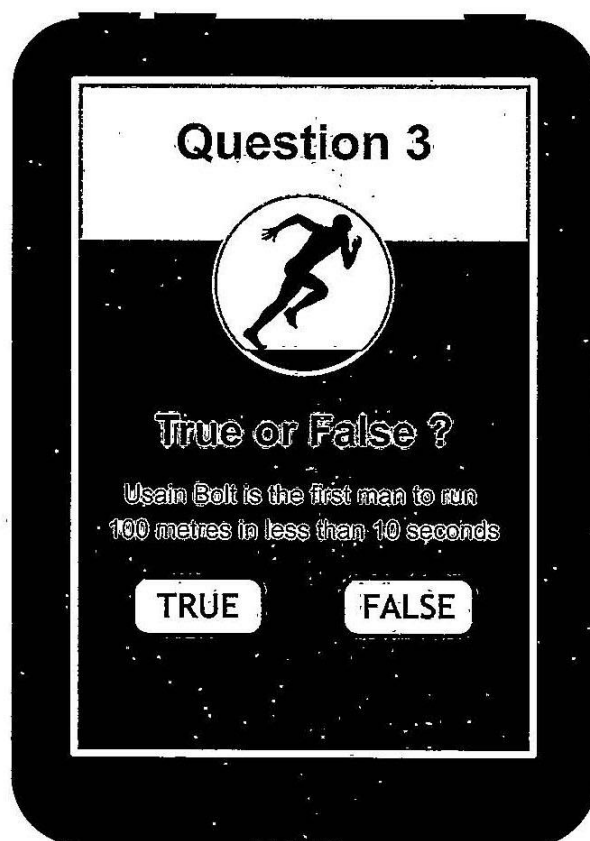
1

It would delete K. Willis from the table

SECTION 2 — 85 marks**Attempt ALL questions**

17. Scott is developing an online quiz with ten true or false questions. At the end of the quiz, the user's final score will be calculated.

(a) The user interface is shown below.



- (i) Explain why a 1-D array of Boolean values is a suitable data structure to store the user's responses.

2

Because there are only 2 answers
to give, so the answer can be set
1 or 0, like a boolean

17. (a) (continued)

(ii) For each correct response, 5 points are added to the user's score.

Using a programming language of your choice, write efficient code to calculate the user's final score.

Your code should use a running total within a loop.

4

```
FOR count = 0 TO 9  
Set Score = 0  
FOR count = 0 TO 9  
RECEIVE answer FROM user  
IF answer = correct  
  
FOR count = 0 TO 9  
RECEIVE answer(count) FROM user  
IF answer(count) = correct answer  
Score = Score + 5  
END IF  
  
NEXT
```

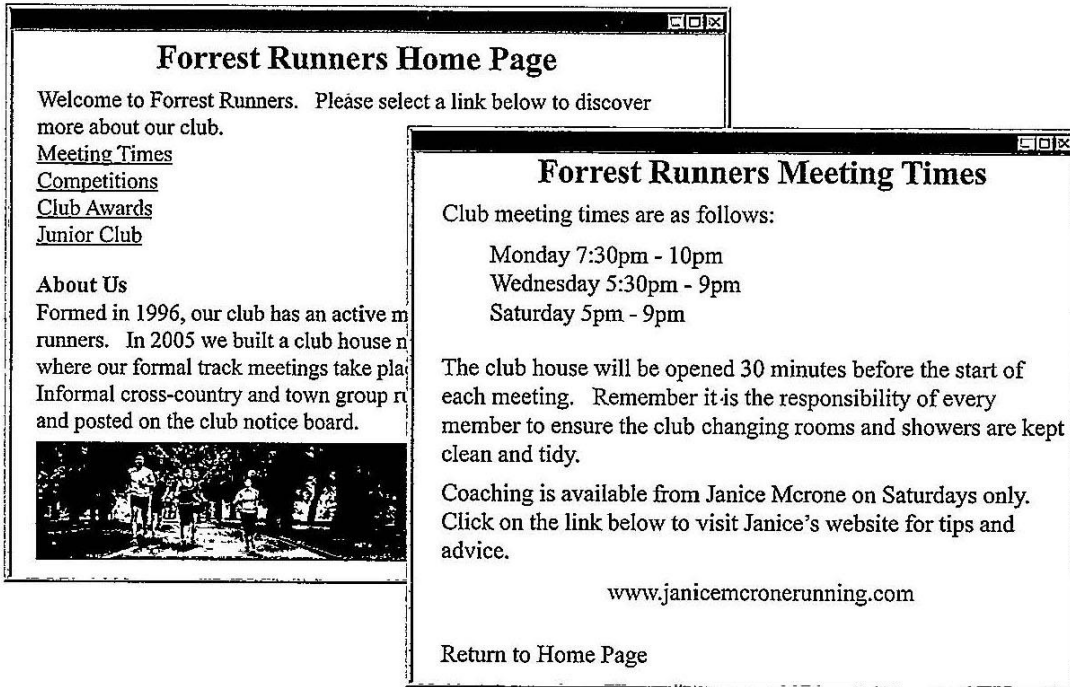
(b) Explain why the quiz program would be compiled.

1

So that it only needs to be translated
once and will run quicker

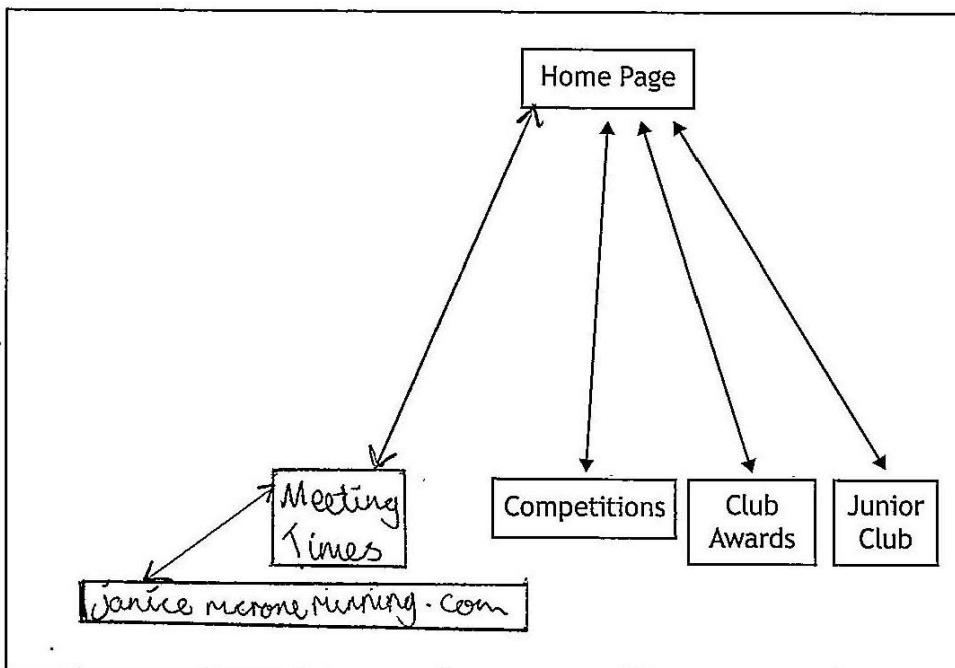
18. Julie creates a website to advertise her athletics club.

(a) Low-fidelity prototypes of each web page are shown below.



Referring to the two prototypes, complete the hierarchical structure of the website below.

3



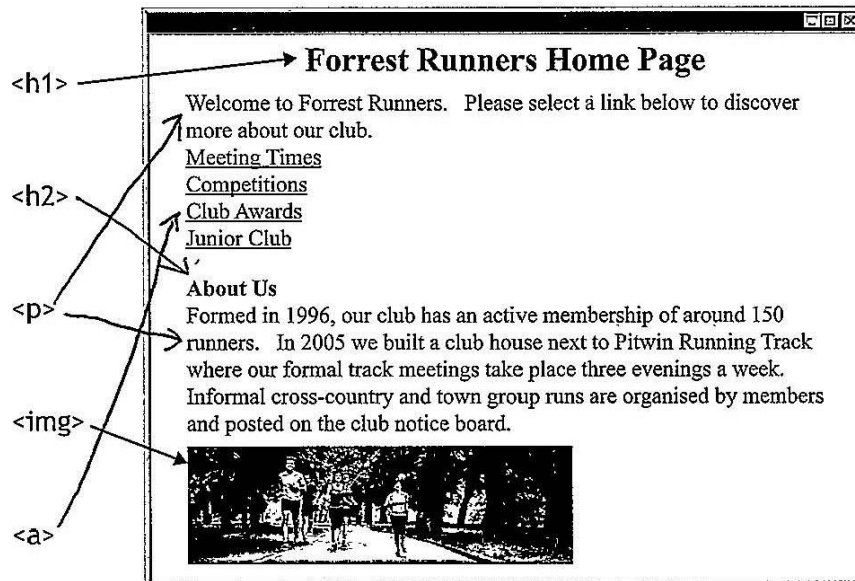
18. (continued)

- (b) When implementing the home page prototype, Julie makes use of several HTML elements.

The diagram below identifies where `<h1>` and `` elements have been used.

Complete the diagram by drawing arrows to identify where the `<p>`, `<h2>` and `<a>` elements should be used.

3



- (c) State two reasons why jpeg files are often used as the standard file format for photographs on web pages.

2

Reason 1 They have the greatest colour depth, so they have highest quality pictures

Reason 2 Because JPG are the most commonly used file formats for photographs

18. (continued)

- (d) When Julie created the 'Junior Club' web page, she used three <div> elements and external CSS rules to colour each of the three sections.

HTML Document			
<pre><!DOCTYPE html> <html> <head> <title>Forrest Runners</title> <link rel="stylesheet" href="styles.css"> </head> <body> <div> <h2>Forrest Juniors</h2> <p>Forrest Juniors Running Club is open to anybody aged 5 to 17. If you wish to run seriously or just for fun please come along at the following times.</p> </div> <div class="middlePart"> <h2>Meeting Times</h2> <p>Junior meeting times are 4pm-6pm on Tuesday, Wednesday and Sunday afternoons.</p> </div> <div> <h2>Required Kit</h2> <p>All runners are expected to bring their own:</p> T-shirt or running top Shorts Trainers or running spikes Back to Home Page </div> </body> </html></pre>	<table border="1"> <thead> <tr> <th>styles.css</th> </tr> </thead> <tbody> <tr> <td> <pre>body{background-color:DarkBlue} div {background-color:LightBlue} p { font-family:Times New Roman; font-size:12px; text-align:left; color:Black} .middlePart {background-color:White}</pre> </td> </tr> </tbody> </table>	styles.css	<pre>body{background-color:DarkBlue} div {background-color:LightBlue} p { font-family:Times New Roman; font-size:12px; text-align:left; color:Black} .middlePart {background-color:White}</pre>
styles.css			
<pre>body{background-color:DarkBlue} div {background-color:LightBlue} p { font-family:Times New Roman; font-size:12px; text-align:left; color:Black} .middlePart {background-color:White}</pre>			

Julie styled her <div> elements to display with a light blue background:

```
div {background-color:LightBlue}
```

Explain why a browser would not display the page with three light blue sections.

2

Because, it would just show the same light blue background across all 3 sections as there's nothing to separate them. There's a space between the div and the tags, so the CSS wouldn't be implemented

18. (continued)

- (e) The Junior Club web page is displayed in a browser. Part of this is shown below.

All runners are expected to bring their own:

- T-shirt or running top
- Shorts
- Trainers or running spikes

Write a CSS rule that would ensure the text size of the bullet point list is the same text size as the sentence.

2

```
#list { font-size: 12px; }
```

- (f) The user can return to the Home page from the Junior Club page.

- (i) State the type of hyperlink that has been used to return to the Home page.

1

Internal

- (ii) State the type of addressing that has been used in the hyperlink.

1

Relative

- (g) Web developers test the consistency of the web pages they create.

State two other examples of tests that can be carried out on a web page.

2

Test 1 Check that graphics load

Test 2 Test all the links if they work

19. A program is being designed that will allow pupils to add money to their lunch money account. The user enters their name, an 8 character password and the amount of money they want to add. A button is then clicked and the updated balance of the account is displayed.

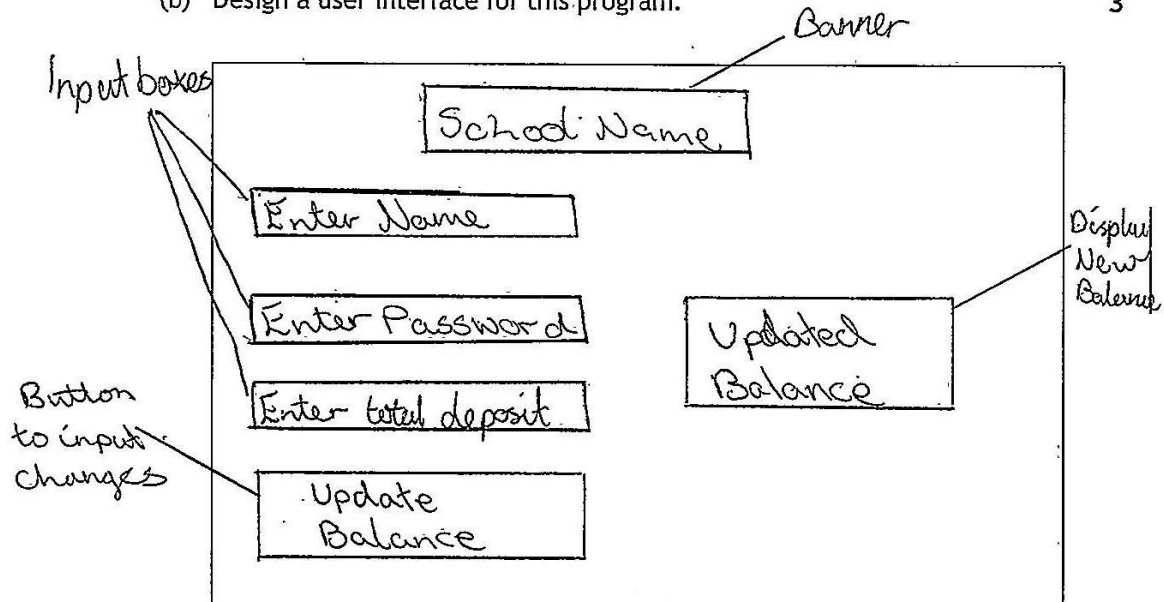
(a) Analyse the problem and identify all inputs, processes and outputs. 3

Input(s) Name, password, money to add,
button press

Process(es) length check password, add
money to existing balance

Output(s) New balance

(b) Design a user interface for this program. 3



(c) The password must contain 8 characters.

(i) State a suitable pre-defined function to check that the password contains 8 characters. 1

length check

(ii) Explain why a pre-defined function would be used. 1

To make the code writing easier

19. (continued)

- (d) Using a design technique of your choice, design an efficient solution to ensure that a password of only 8 characters can be entered.

An error message should be displayed if the incorrect number of characters is entered, and the user asked to re-enter the password.

4

```

RECEIVE Password FROM user
WHILE .NOT (Password.len = 8) THEN
    PRINT "Please enter an 8
        letter password."
    RECEIVE Password FROM user
END WHILE
  
```

- (e) Test data will be used to ensure the validation of the password works correctly.

Complete the test table below.

3

Type of test	Input	Expected result
Normal	12345678	Program continues
Exceptional	Jaj8up	Error message displayed.

20. A database stores information about a walking club.

The table 'Route' stores all the available routes.

The table 'Walk' stores information when one of these routes is completed.

Part of the information stored in each table is shown below.

Route						
routeID	start	finish	estimatedMins	Kms	routeType	rating
1	Shiel Bridge	Glen More	480	23	Mountain	5
2	Aberdour	Anstruther	600	44	Coastal	4
3	Rackwick	Rackwick	180	12	Coastal	2
4	Kelty	Loch Glow	90	5	Forest	1
5	Fort William	Steall Falls	210	8	Hill	4
6	Pitlochry	Blair Atholl	175	11	Forest	2

Walk						
walkNumber	walkDay	departure	numberWalkers	rained	minutesTaken	routeID
1893	21/03/17	09:00	9	Yes	213	3
2002	30/04/17	07:30	15	No	167	3
0019	27/11/14	11:10	30	No	606	2
0218	01/02/16	13:30	3	No	102	4
0723	16/10/15	02:00	12	Yes	713	2
0086	01/01/15	08:45	24	Yes	180	6
1992	05/04/17	13:00	2	No	512	1
0499	19/11/15	14:00	9	No	190	5

(a) Complete the table below to identify the keys that were created when this relational database was implemented.

MARKS

DO NOT WRITE IN THIS MARGIN

3

	Table	Field
Primary Key	Route	routeID
Primary Key	Walk	walk number
Foreign Key	Walk	routeID

20. (continued)

- (b) State the attribute type that would be most suitable for the following fields. 2

walkDay Date/Time

minutesTaken Number

- (c) Design a query that would find the routeID of all the Mountain routes with a rating of 3 or more. 5

Field(s)	routeID routeID
Table(s)	Route
Search criteria	routeType = Mountain rating >= 3

- (d) (i) Read the SQL statement below.

```
SELECT start, routeType, minutesTaken
FROM Route, Walk
WHERE Route.routeID = Walk.routeID
AND rating = 2;
```

Complete the table below to show the expected output from this SQL statement. 3

start	routeType	minutesTaken
Rockwick	Coastal	213
Rockwick	Coastal	167
Pitlochry	Forest	180

20. (d) (continued)

- (ii) Describe how to evaluate the accuracy of the expected output from an SQL statement.

1

Check if the output from the SQL
query matches the output expected.

- (e) The database was implemented without referential integrity.

Describe a problem that may occur when adding a new record to the 'Walk' table.

1

walk.routeID may not be equal to
route.routeID

21. (continued)

(b) Customers who spend £50 or more on tickets qualify for a number of food vouchers.

Step 5 of the algorithm has been implemented below.

...

Line 23 IF totalCost < 50 THEN

Line 24 SEND "Sorry, no food voucher" TO DISPLAY

Line 25 ELSE

Line 26 IF totalCost >100 THEN

Line 27 SEND "You have been awarded 2 food
vouchers" TO DISPLAY

Line 28 ELSE

Line 29 SEND "You have been awarded 1 food
voucher" TO DISPLAY

Line 30 END IF

Line 31 END IF

...

(i) State the output if:

(A) the total cost is 104;

1

2 food vouchers awarded

(B) the total cost is 50.

1

1 food voucher awarded

(ii) When the completed code is tested, a user enters 2.5 for the number of adult tickets.

The program continues to run and calculates the total cost.

Explain how the program could be made fit for purpose.

1

Change the data types for adult quantity
and make it an integer

(iii) State the processor component that calculates the total cost.

1

ALU

(iv) Name the part of the computer system that transfers the value of totalCost from main memory to the processor.

1

Data bus

22. An electronic scoreboard is operated by a computer system.

STOW RUGBY CLUB		
HOME	72:53	VISITOR
54	2ND HALF	3
8	TRY	0
7	CONVERSION	0
0	PENALTY	1
0	DROP GOAL	0

(a) The computer system stores the time and scores as binary numbers and the text using extended ASCII code.

(i) In the box below, show how the value 54 would be stored as an 8-bit binary number. 1

	128	64	32	16	8	4	2	1
54	0	0	1	1	0	1	1	0

(ii) Calculate the number of bits required to store the text '2ND HALF'. 2

7×8 $= 56 \text{ bits}$

22. (continued)

(b) The scoreboard highlights some of the information it displays using coloured objects. These are stored as vector graphics.

(i) State the name of the object.

1

Rectangle

(ii) State two attributes of this object.

2

Attribute 1 Shape, fill: White

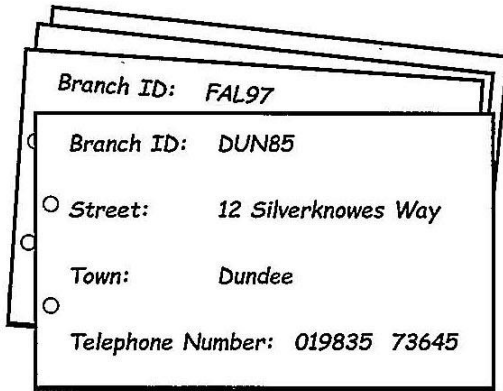
Attribute 2 Shape outline: Black

(c) Describe a feature or function of the computer system that could be used to reduce the amount of energy it uses.

1

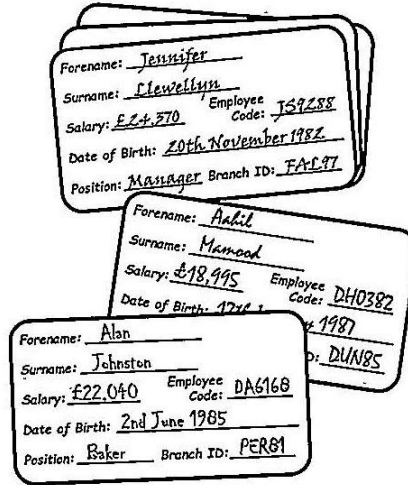
Reduce brightness of the screen

23. Sydney Bakery owns three high street shops in Dundee, Falkirk and Perth.
The bakery wishes to design and implement a database to store the information shown below.



Examples of Shop Information Cards

Currently typed up by staff and kept as printed copies.

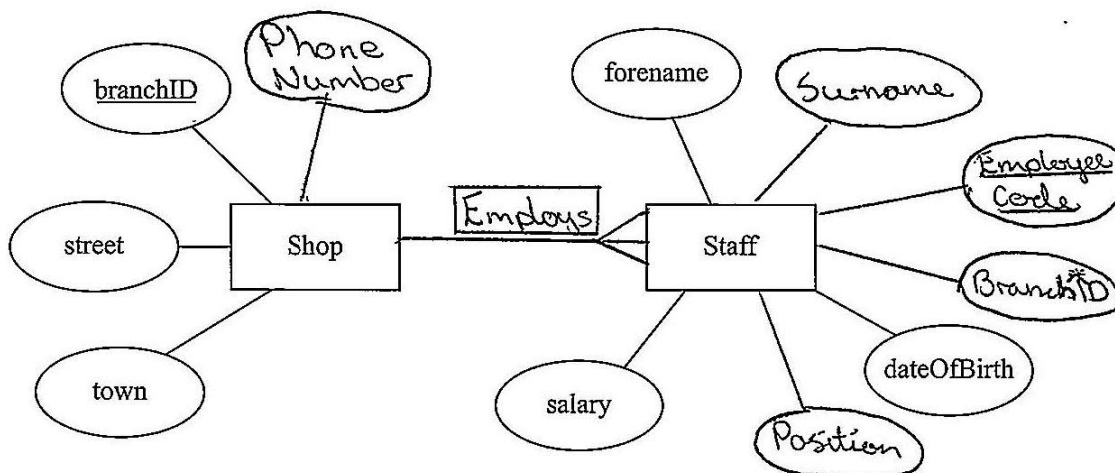


Examples of Staff Information Cards

Currently hand written by each shop manager and kept for reference.

- (a) Complete the entity relationship diagram below by:
- drawing any missing attributes from either entity
 - drawing the relationship between the entities
 - naming the relationship between the entities
 - identifying any additional key fields.

6



23. (continued)

(b) As well as an entity relationship diagram, a data dictionary is created at the design stage.

(i) State the purpose of a data dictionary.

1

To outline field names, and their
validations, and if they are a kind of key

(ii) The attribute 'town' will store the place where each shop is located. A presence check has been noted in the data dictionary for this field.

State one other type of validation that should be included in the data dictionary for this attribute.

1

Restricted choice: Dundee, Falkirk and
Perth

23. (continued)

- (c) Sydney Bakery also maintains a website.

Part of the HTML code for the home page is shown below.

```
...
<style>
.mainHeading {text-align:right}
h2 {text-align:center}
div {text-align:left}
</style>
</head>

<body>
<div class="mainHeading">
<h1>Sydney Bakery</h1>
<h2>Baking Since 1935</h2>
</div>

<div>
<p>Started over 70 years ago, Sydney's now employs
over 100 staff.
<ol><li><a href="#Option1">Sydney's Family</a></li>
<li><a href="#Option2">Our Stores</a></li> <li><a
href="#Option3">Our Products</a></li></ol>
</p>

<p id="Option1">The founders of our bakery were
David and Davina Sydney.</p>
</div>
...
```

- (i) Explain the purpose of href="#Option1" in the code above.

1

~~To link to the Sydney's Family section~~
~~of the site~~ To apply internal CSS
to the page

23. (c) (continued)

- (ii) Draw how the home page will look when viewed in a browser. 5
Some of the content has already been added.

The sketch shows a webpage layout for Sydney Bakery. At the top right, the text 'Sydney Bakery' is written in a large, cursive font. Below it, 'Baking Since 1935' is written in a smaller, cursive font. In the middle left, there is a paragraph of text: 'Started over 70 years ago, Sydney's now employs over 100 staff.' Below this paragraph are three underlined menu items: 'Sydney's Family', 'Our Stores', and 'Our Products'. At the bottom left, there is another paragraph: 'The founders of our bakery were David and Davina Sydney.'